


What Did the Inventor of the 10-Ton Truck So Often Say?



For each exercise, draw a line through the two given points. Find the slope of this line. Write the letter of the exercise in the box containing the slope.

B (4, 4)
(1, 2)

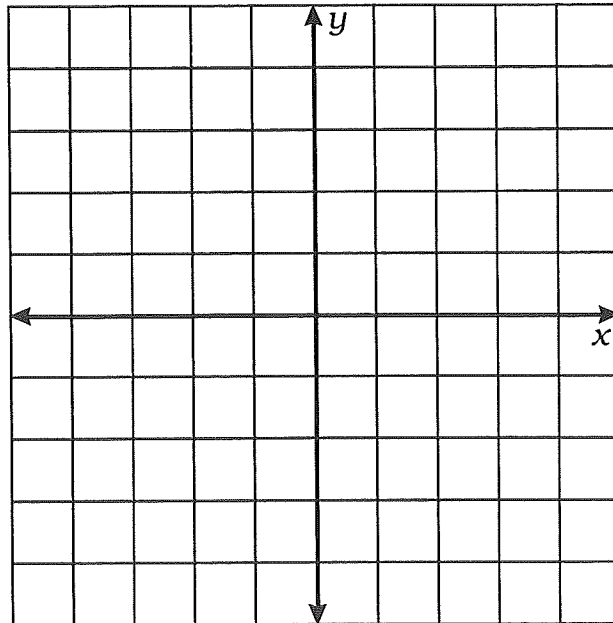
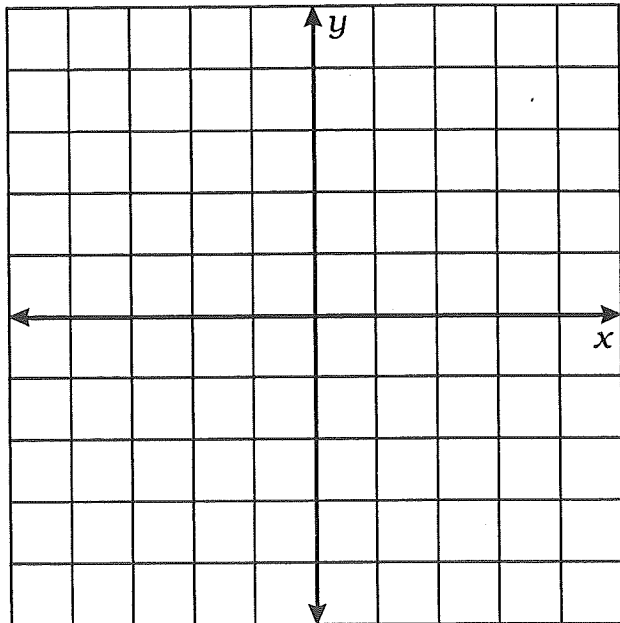
E (2, 0)
(-4, 4)

O (1, -3)
(-3, -4)

I (-1, -3)
(2, 3)

E (-4, 3)
(-2, -1)

O (-3, 0)
(-1, 5)



E (0, 2)
(5, -1)

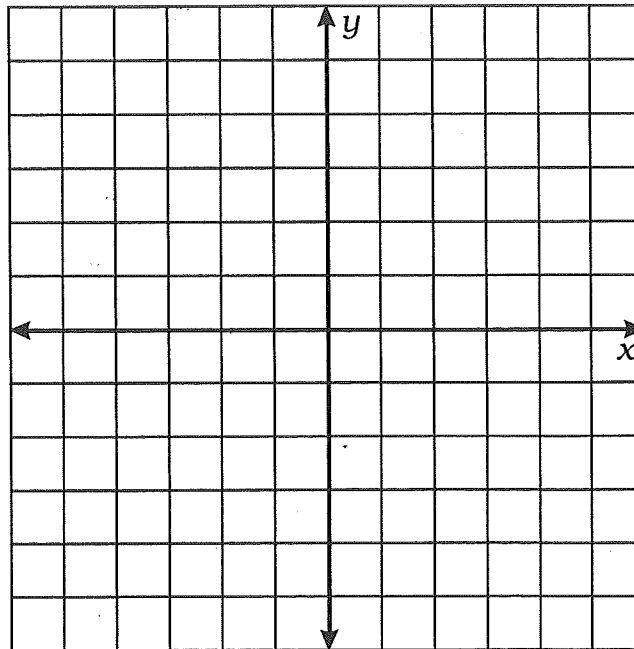
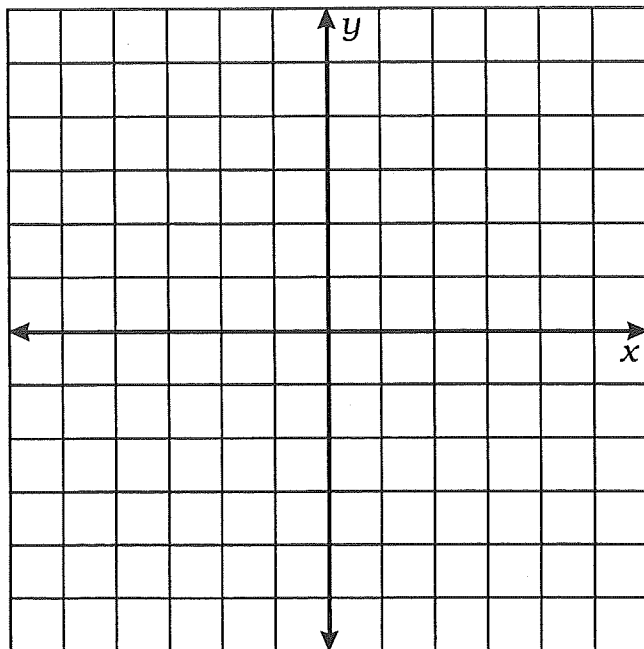
D (5, 6)
(2, -1)

L (-5, 2)
(0, -3)

D (0, 0)
(2, -6)

G (4, 5)
(-2, 4)

S (2, -3)
(-5, -3)



$\frac{1}{3}$	-3	2	$-\frac{2}{3}$	0	-2	-1	$-\frac{7}{2}$	$\frac{2}{3}$	$-\frac{3}{5}$	$-\frac{1}{5}$	$\frac{1}{6}$	$\frac{5}{2}$	$\frac{1}{4}$	$\frac{7}{3}$	3
---------------	----	---	----------------	---	----	----	----------------	---------------	----------------	----------------	---------------	---------------	---------------	---------------	---